

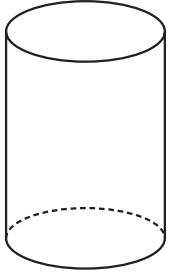


組	番	名前
---	---	----

## 19 立体 (角柱と円柱)

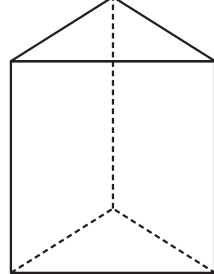
1 ( ) の中に, 立体の名前を書きましょう。

①



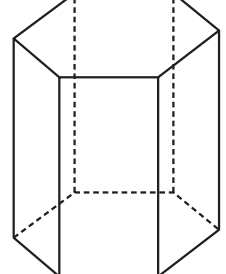
( )

②



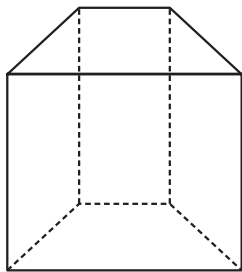
( )

③



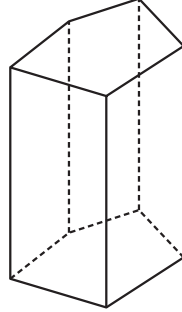
( )

④



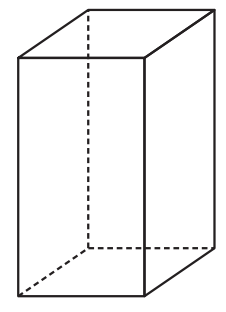
( )

⑤



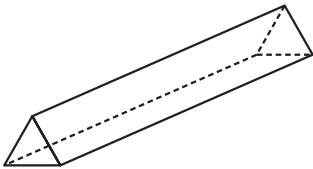
( )

⑥



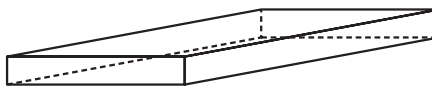
( )

⑦



( )

⑧



( )

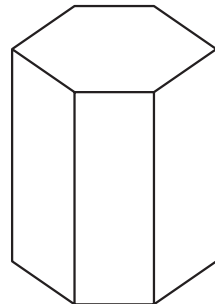
⑨



( )


三角柱	}	角柱
四角柱		
五角柱		
六角柱		
⋮		

⑩



( )

⑪



( )

ひとつだけ ぬりましょう。



やさしかった



ふつう



むずかしかった