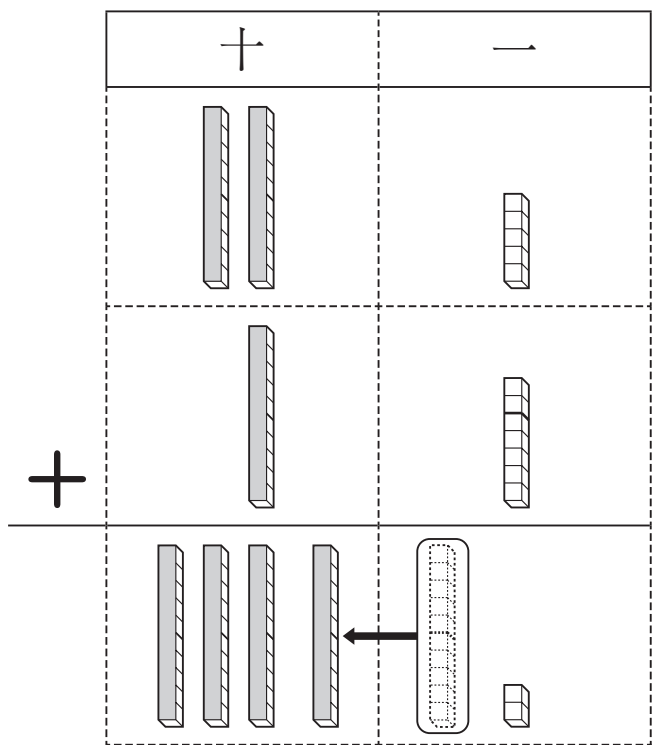


組	番	名前
---	---	----

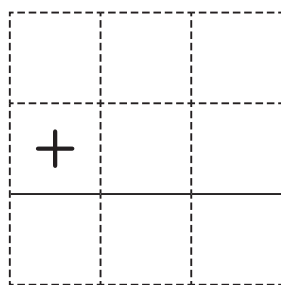
## ④ たし算の ひっ算 (くり上がりの ある たし算)

$25 + 17 = \square$

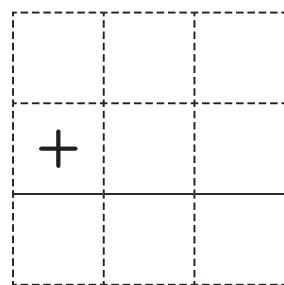


1 つぎの 計算を ひっ算で  
しましょう。

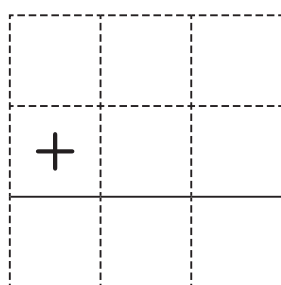
①  $35 + 26$



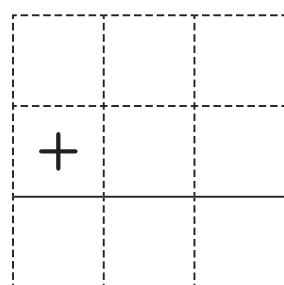
②  $28 + 36$



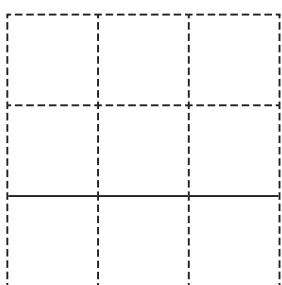
③  $49 + 13$



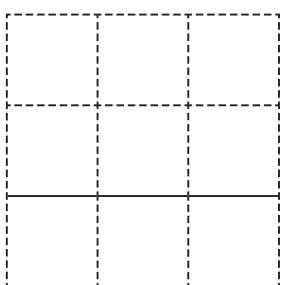
④  $36 + 16$



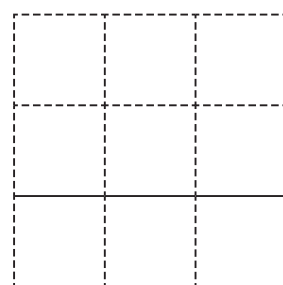
⑤  $28 + 63$



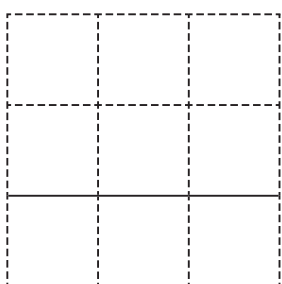
⑥  $43 + 37$



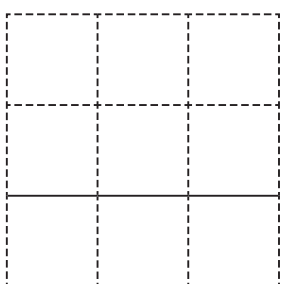
⑦  $19 + 18$



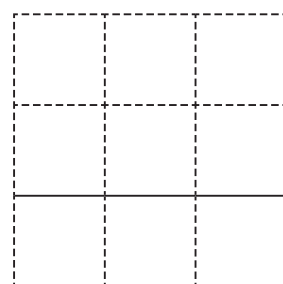
⑧  $16 + 37$



⑨  $19 + 27$



⑩  $44 + 17$



ひとつだけ ぬりましょう。

やさしかった	ふつう	むずかしかった