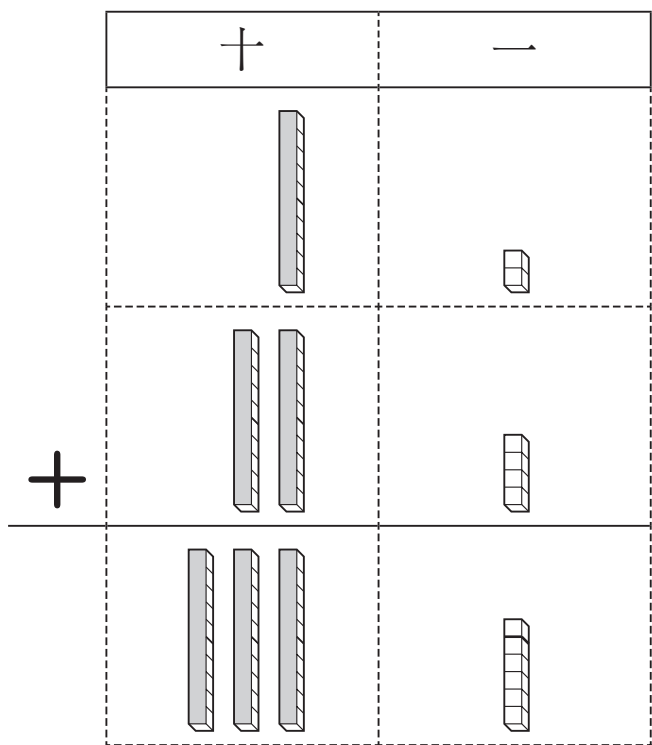


	組	番	名前
--	---	---	----

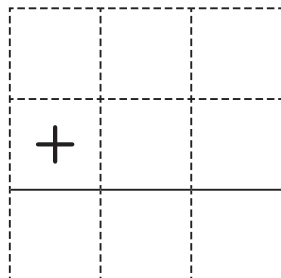
## ④ たし算の ひっ算 (2けたの たし算)

$12 + 24 = \square$

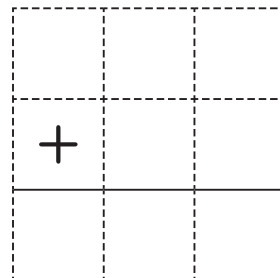


1 ひっ算で しましょう。

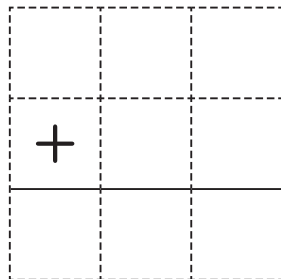
①  $31 + 56$



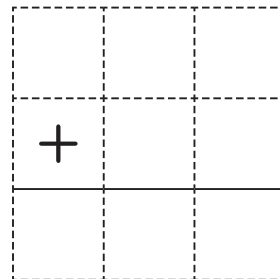
②  $50 + 24$



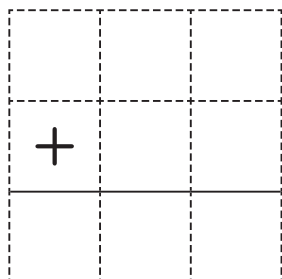
③  $27 + 30$



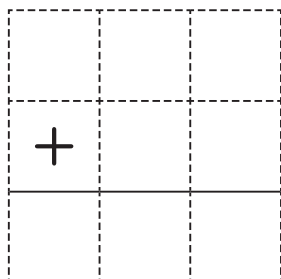
④  $40 + 30$



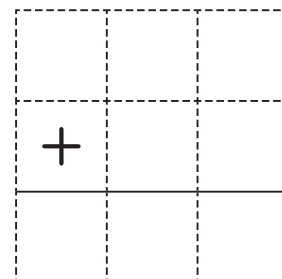
⑤  $42 + 52$



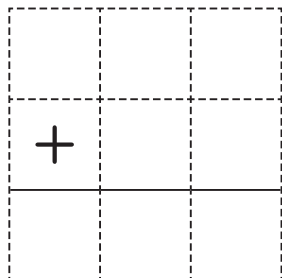
⑥  $37 + 62$



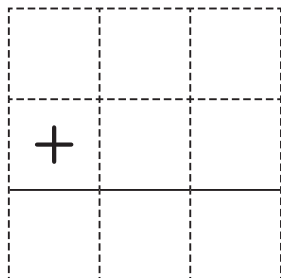
⑦  $15 + 64$



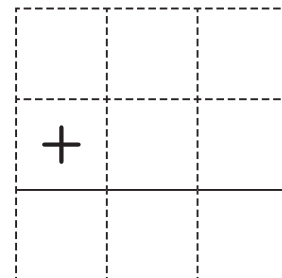
⑧  $50 + 32$



⑨  $68 + 10$



⑩  $20 + 60$



ひとつだけ ぬりましょう。

