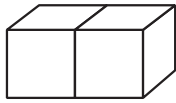
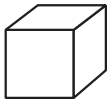
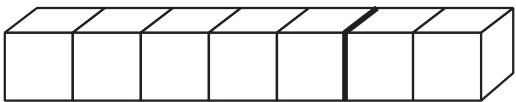
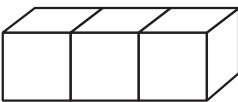


くみ	ばん	なまえ
----	----	-----

③ あわせて いくつ ふえると いくつ

1 たしざんを しましょう。

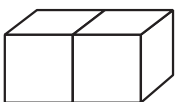
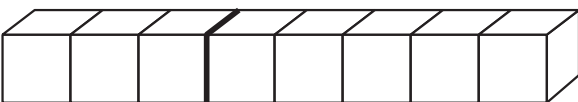
【れい】  ←  $2 + 1 = 3$

①  → 

$\square + \square = \square$

②  → 

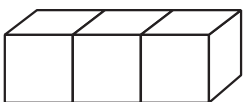
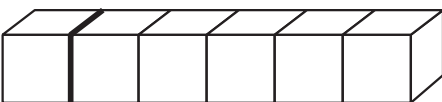
$\square + \square = \square$

③  → 

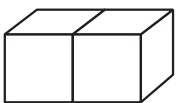
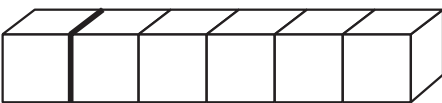
$\square + \square = \square$

④  ← 



$\square + \square = \square$

⑤  → 

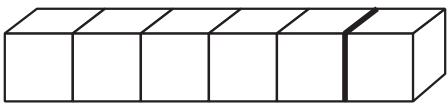
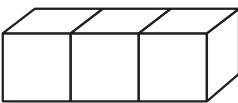
$\square + \square = \square$

⑥  → 

$\square + \square = \square$

⑦  → 

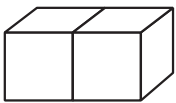
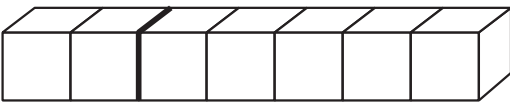
$\square + \square = \square$

⑧  → 

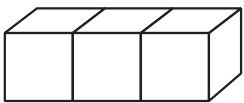
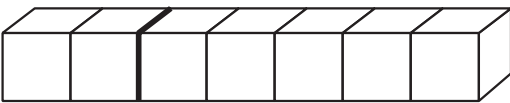
$\square + \square = \square$

⑨  ← 

$\square + \square = \square$

⑩  → 

$\square + \square = \square$

⑪  → 

$\square + \square = \square$

⑫  ← 

$\square + \square = \square$

ひとつだけ ぬりましょう。



やさしかった



ふつう



むずかしかった